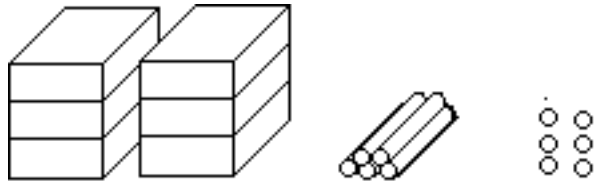
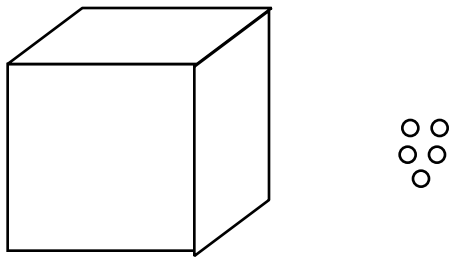


1. This many candies are in the store room.



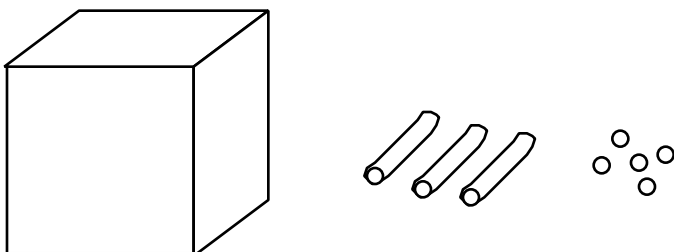
The factory makes 350 candies. How many candies are in the store room now?

2. This many candies are in the store room.



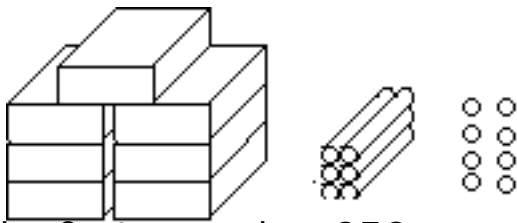
How would you unpack some of these candies so that you would be able to send 375 candies to a shop. How many candies would be left in the store room?

3. This many candies are in the store room.



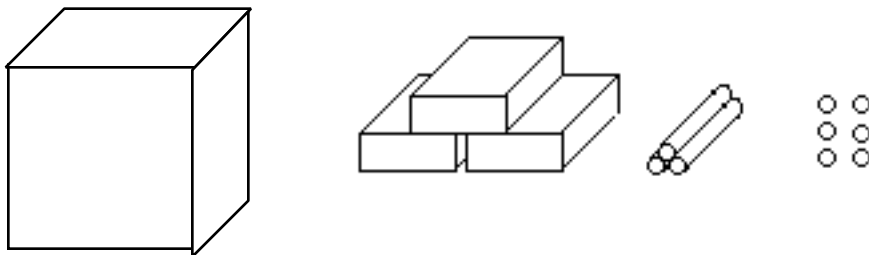
How would you unpack some of these candies so that you would be able to send 254 candies to a shop. How many candies would be left in the store room?

1. This many candies were in the store room.



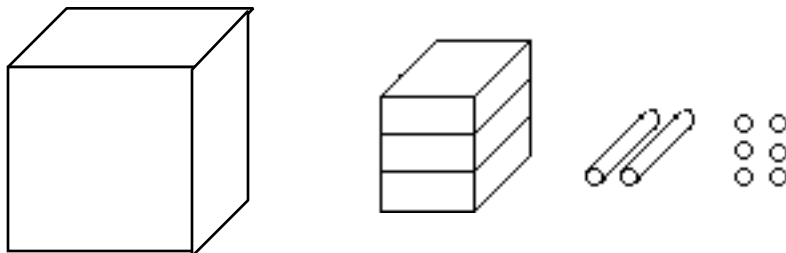
The factory makes 252 more candies. How many candies are in the store room now?

2. This many candies are in the store room.



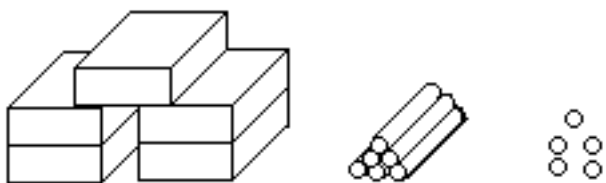
How would you unpack some of these candies so that you would be able to send 425 candies to a shop. How many candies would be left in the store room?

3. This many candies were in the store room.



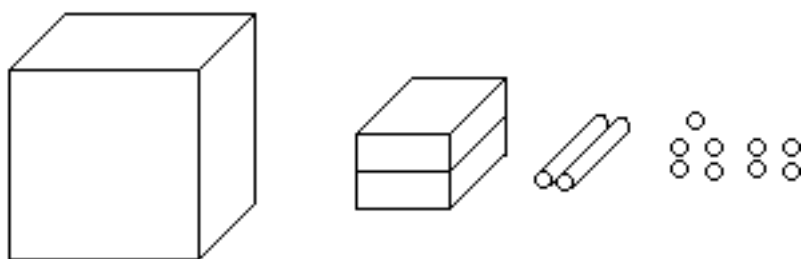
How would you unpack some of these candies so that you would be able to send 555 candies to a shop. How many candies would be left in the store room?

1. This many candies were in the store room.



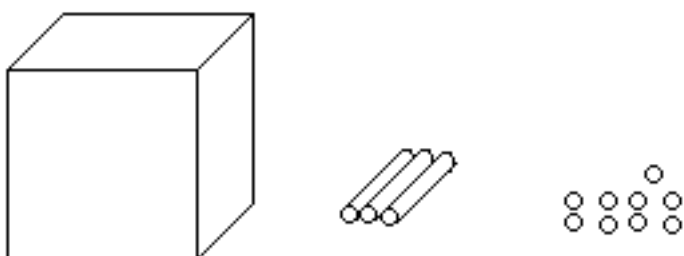
The factory makes 665 more candies. How many candies are in the store room now?

2. This many candies were in the store room.



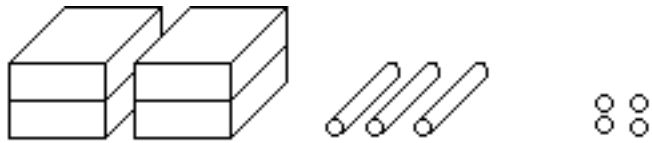
The factory sends 564 candies to a shop. How many candies are in the store room now?

3. This many candies are in the store room.



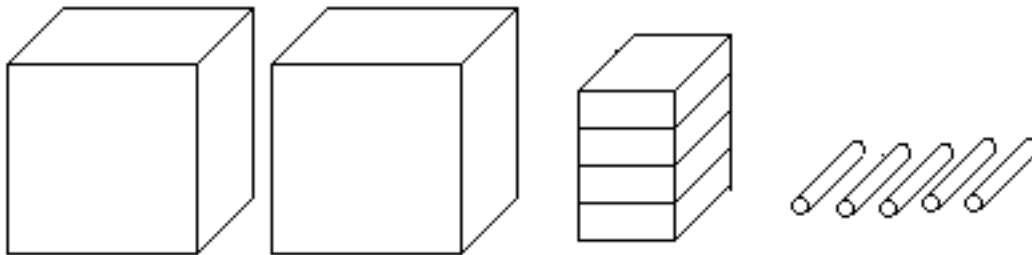
The factory sends 665 candies to a shop. How many candies are left in the store room?

1. These candies are in the store room.



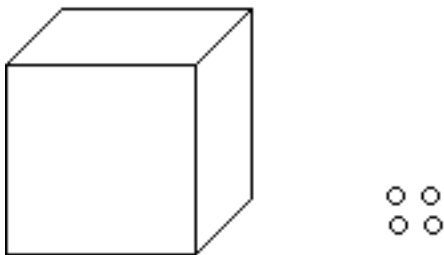
The factory makes 774 candies. How many candies are in the store room now?

2. This many candies are in the store room.



3. The factory sends 563 candies to a shop. How many candies are in the store room now?

This many candies are in the store room.



The factory sends 476 candies to a shop. How many candies are left in the store room.