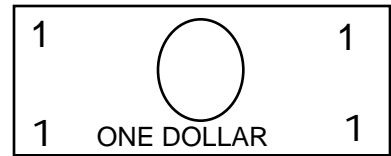
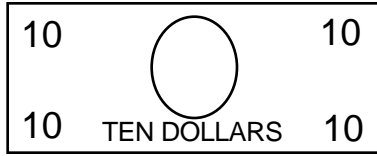
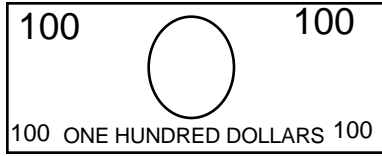


1. Find three ways you can have \$258 in the safe.

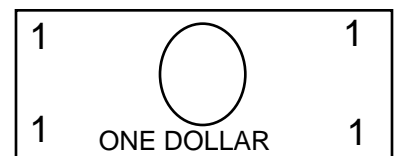
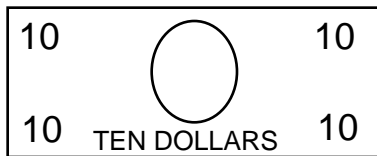
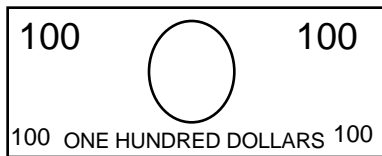


1. _____

2. _____

3. _____

2. Find three ways you can have \$458 in the safe.

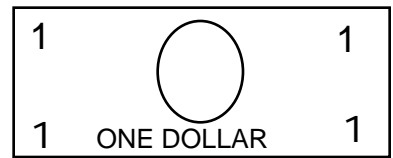
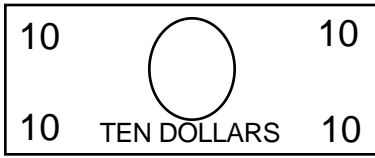
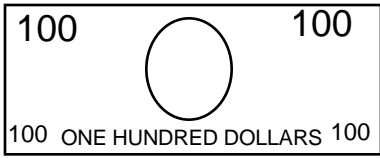


1. _____

2. _____

3. _____

1. Find three ways you can have \$564 in the safe.

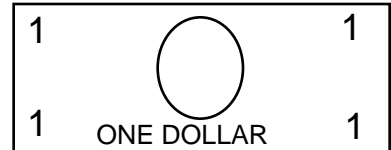
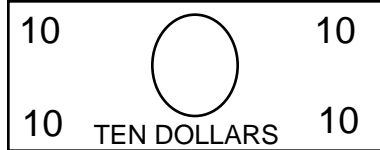



1. _____

2. _____

3. _____

2. Find three ways you can have \$674 in the safe.

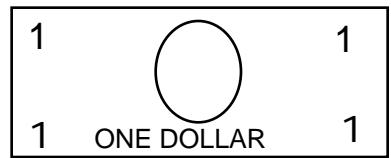
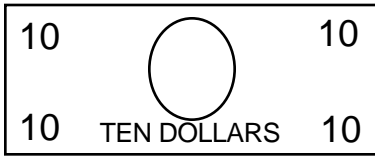
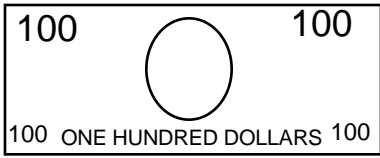


1. _____

2. _____

3. _____

1. Find three ways you can have \$702 in the safe.

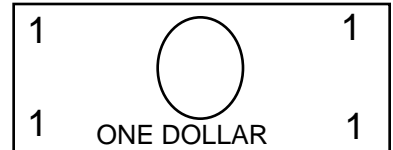
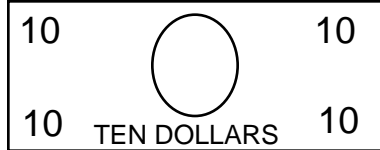



1. _____

2. _____

3. _____

2. Find three ways you can have \$512 in the safe.



1. _____

2. _____

3. _____
