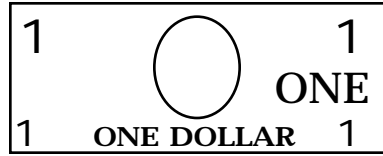
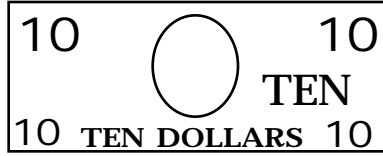


1. Find three ways you can have \$73 in the safe.



---

---


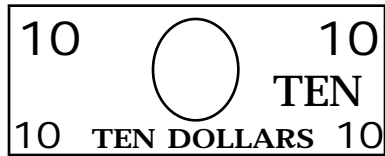
---

---

---

---

2. Find three ways you can have \$64 in the safe.



---

---



---

---

---

---

1. Find three ways you can have \$87 in the safe.



---

---


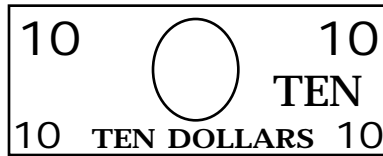
---

---

---

---

2. Find three ways you can have \$78 in the safe.



---

---


---

---

---

---

1. Find three ways you can have \$58 in the safe.



---

---

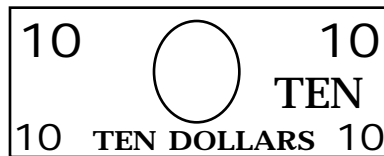
---

---

---

---

2. Find three ways you can have \$68 in the safe.



---

---

---

---

---

---