


1. There are this many candies in the storeroom.



How would you unpack some of these candies so you would be able to send 7 rolls and 9 candies to a shop? How many will be left in the store room?

2. There are this many candies in the store room.



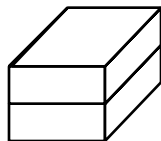
How could you unpack some of these candies so that you would be able to send 1 box, 2 rolls, and 8 candies to a shop. How many candies would be left in the store room?

3. There were this many candies in the store room.



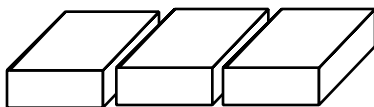
The factory makes 189 more candies. How many candies will be in the store room now?

1. There are this many candies in the store room.



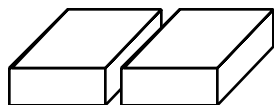
How would you unpack some of these candies so that you would be able to send 1 box, 2 rolls, and 9 candies to a shop. How many candies would be left in the store room?

2. There are this many candies in the store room.



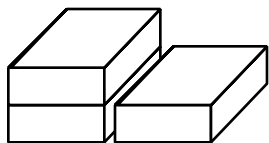
How would you unpack some of these candies so that you would be able to send 1 box and 4 rolls to a shop. How many candies would be left in the store room?

3. There are this many candies in the store room.



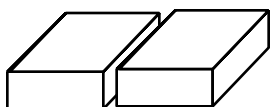
The factory makes 1 box, 4 rolls and 8 candies. How many candies will be in the store room now?

1. This many candies were in the store room.



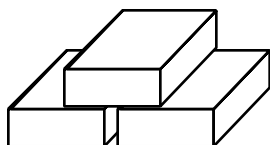
How would you unpack some of these candies so that you would be able to send 2 boxes, 7 rolls, and 6 candies to a shop. How many candies would be left in the store room?

2. This many candies are in the store room.



How would you unpack some candies so that you would be able to send 1 box, 5 rolls, and 3 candies to a shop. How many candies would be left in the store room?

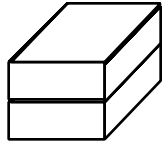
3. This many candies are in the store room.



How would you unpack some of these candies so that you would be able to send 9 rolls and 5 candies to a shop. How many candies would be left in the store room?

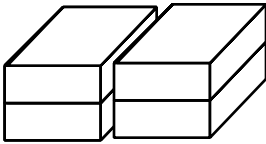
Factory 3

1. This many candies are in the store room.



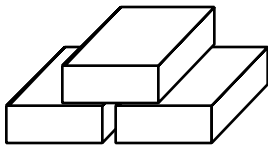
The factory makes 198 more candies. How many candies will be in the store room now?

2. This many candies are in the store room.



How would you unpack some of these candies so that you could send 235 candies to a shop. How many candies will be left in the store room?

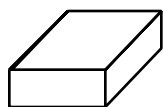
3. This many candies are in the store room.



How would you unpack some of these candies so that you would be able to send 135 candies to a shop. How many candies would be left in the store room?

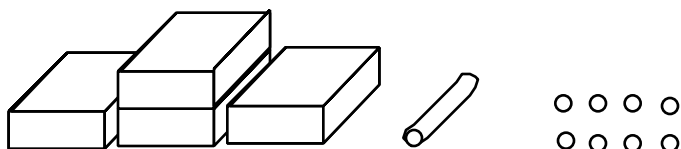
Factory 4

1. This many candies are in the store room.



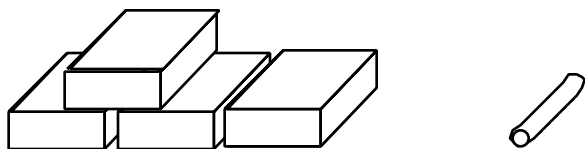
The factory makes 252 more candies. How many candies will be in the store room now?

2. This many candies are in the store room.



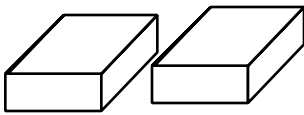
How would you unpack some of these candies so that you would be able to send 162 candies to a shop. How many candies would be left in the store room?

3. This many candies are in the store room.



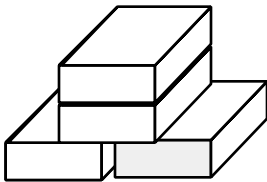
How would you unpack some of these candies so that you would be able to send 162 candies to a shop. How many candies would be left in the store?

1. This many candies are in the store room.



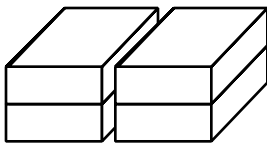
The factory makes 154 candies. How many candies will be in the store room now?

2. This many candies are in the store room.



How would you unpack some of these candies so that you would be able to send 154 candies to a shop. How many candies would be left in the store room?

3. This many candies are in the store room.



Factory 6