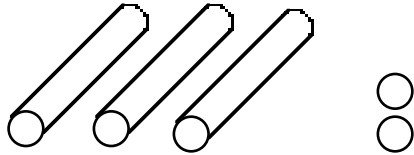
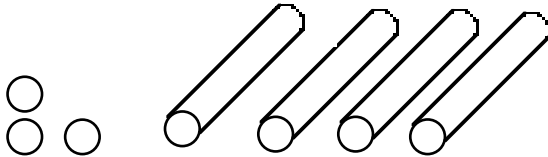


1. This many lemon candies are in the candy shop.



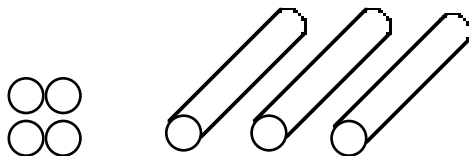
How would you unpack some of these so you can sell 1 roll and 4 candies? How many candies will be left in the shop?

2. This many orange candies are in the candy shop.



How would you unpack some of these candies so you can sell 2 rolls and 4 candies? How many candies will be in the candy shop now?

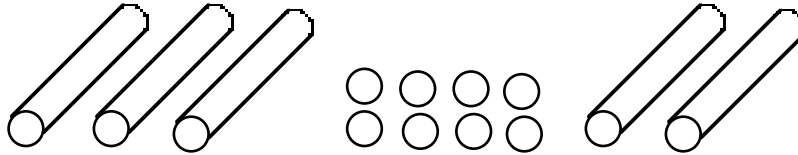
3. This many cherry candies were in the shop.



Ms. Wright makes 19 more cherry candies. How many candies will be in the candy shop now?

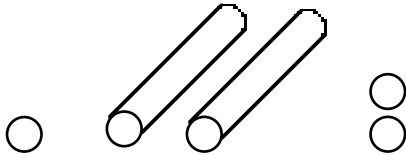
Candy Shop 1

1. This many lemon candies are in the candy shop.



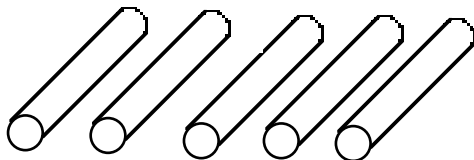
How would you unpack some of these so you can sell 2 rolls and 9 candies ? How many candies will be left in the shop?

2. This many orange candies are in the candy shop.



Ms. Wright makes 37 more candies. How many candies will be in the candy shop now?

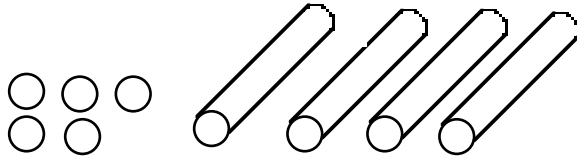
3. This many cherry candies were in the shop.



How would you unpack some of these so you can sell 2 rolls and 7 candies? How many candies will be left in the shop?

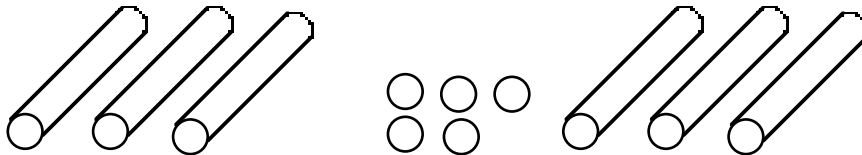
Candy Shop 2

1. This many grape candies are in the candy shop.



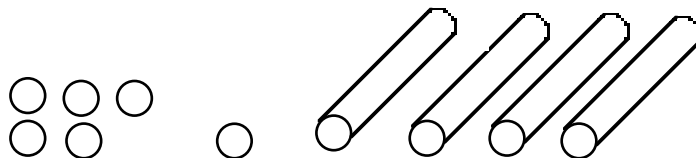
How would you unpack some of these so you can sell 2 rolls and 6 candies ? How many candies will be left in the shop?

2. This many peppermint candies are in the candy shop.



How would you unpack some of these so you can sell 4 rolls and 8 candies? How many candies will be left in the shop?

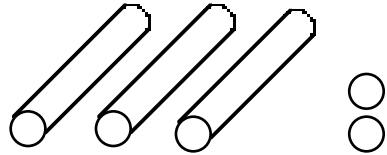
3. This many orange candies were in the shop.



Ms. Wright makes 35 more orange candies. How many candies will be in the candy shop now?

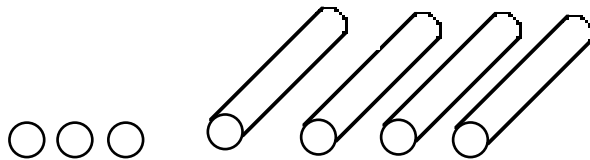
Candy Shop 3

1. This many lemon candies are in the candy shop.



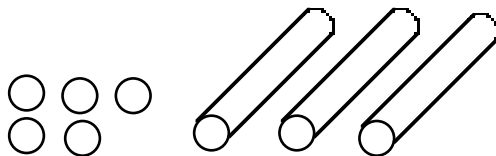
How would you unpack some of these candies so you can sell 1 roll and 3 candies? How many candies will be left in the store room?

2. This many orange candies are in the candy shop.



How would you unpack some of these candies so you can sell 2 rolls and 3 candies? How many candies will be left in the store room?

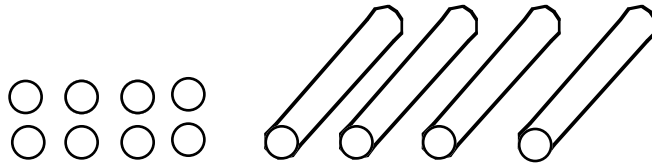
3. This many cherry candies were in the shop.



Ms. Wright makes 36 more cherry candies. How many candies will be in the candy shop now?

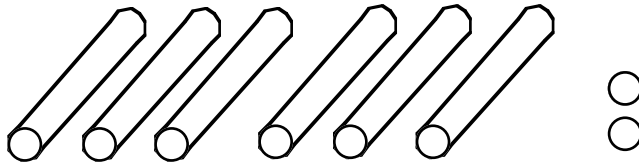
Candy Shop 4

1. This many lemon candies are in the candy shop.



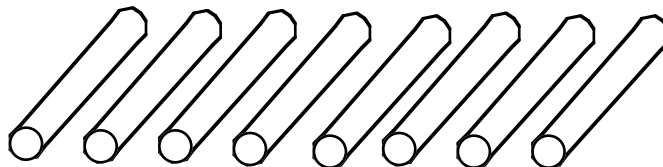
Ms. Wright makes 27 more candies. How many candies will be in the shop now?

2. This many chocolate candies are in the candy shop.



How would you unpack some of these candies so you can sell 25 candies? How many candies will be left in the candy shop?

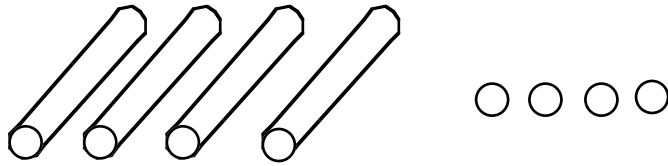
3. This many orange candies are in the shop.



How would you unpack some of these candies so you can sell 49 candies? How many candies will be left in the candy shop?

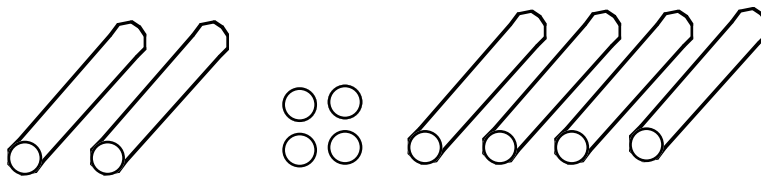
Candy Shop 5

1. This many lime candies are in the candy shop.



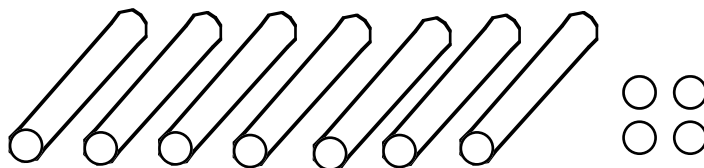
How would you unpack some of these candies so you can sell 29 candies? How many candies will be left in the candy shop?

2. This many orange candies are in the candy shop.



Ms. Wright makes 26 more candies. How many candies will be in the candy shop now?

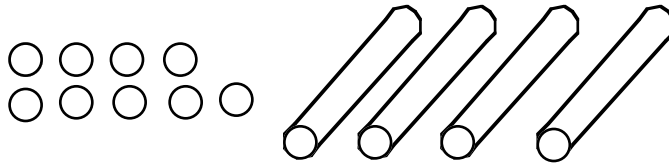
3. This many grape candies are in the shop.



How would you unpack some of these candies so you can sell 56 candies? How many candies will be left in the candy shop?

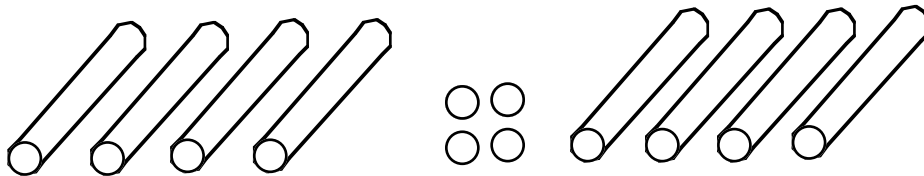
Candy Shop 6

1. This many peppermint candies are in the candy shop.



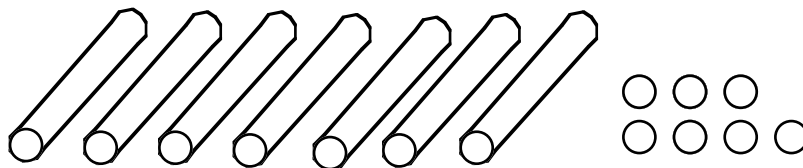
Ms. Wright makes 49 more candies. How many candies will be in the candy shop now?

2. This many cherry candies are in the candy shop.



How would you unpack some of these candies so you can sell 68 candies? How many candies will be left in the candy shop?

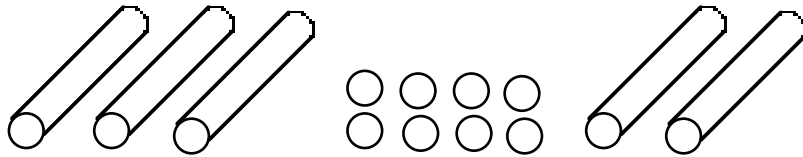
3. This many strawberry candies are in the shop.



How would you unpack some of these candies so you can sell 29 candies? How many candies will be left in the candy shop?

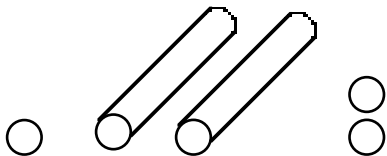
Candy Shop 7

1. This many lemon candies are in the candy shop.



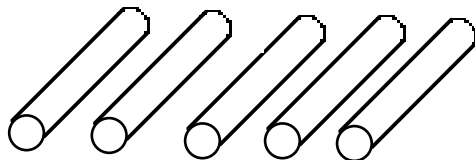
How would you unpack some of these candies so you can sell 69 candies? How many candies will be left in the store room?

2. This many orange candies are in the candy shop.



Ms. Wright makes 27 more candies. How many candies will be in the candy shop now?

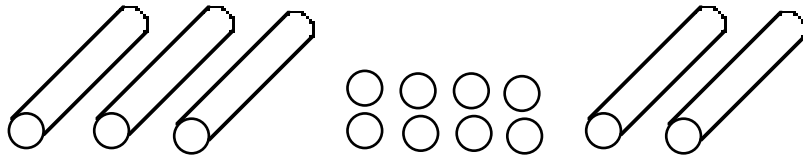
3. This many cherry candies were in the shop.



How would you unpack some of these candies so you can sell 14 candies? How many candies will be left in the store room?

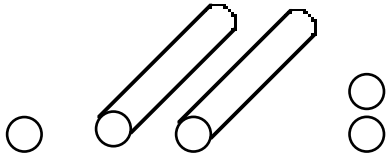
Candy Shop 8

1. This many lemon candies are in the candy shop.



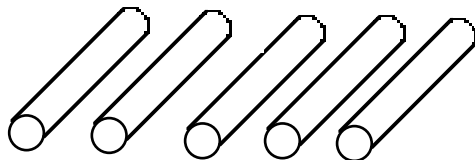
How would you unpack some of these candies so you can sell 69 candies? How many candies will be left in the store room?

2. This many orange candies are in the candy shop.



Ms. Wright makes 27 more candies. How many candies will be in the candy shop now?

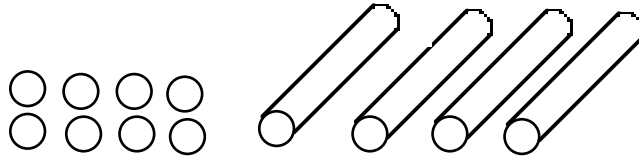
3. This many cherry candies were in the shop.



How would you unpack some of these candies so you can sell 14 candies? How many candies will be left in the store room?

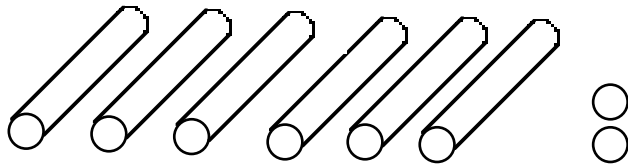
Candy Shop 9

1. This many lemon candies are in the candy shop.



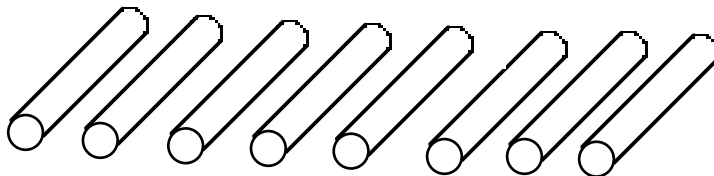
Ms. Wright makes 14 more candies. How many candies will be in the candy shop now?

2. This many chocolate candies are in the candy shop.



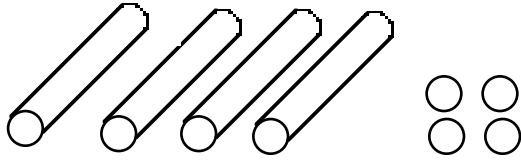
How would you unpack some of these candies so that you can sell 14 candies? How many candies will be left in the store room?

3. This many orange candies were in the shop.



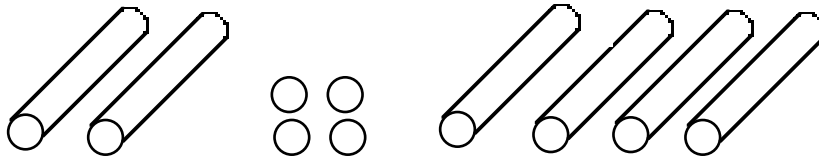
How would you unpack some of these candies so you can sell 11 candies? How many candies will be left in the store room?

1. This many lime candies are in the candy shop.



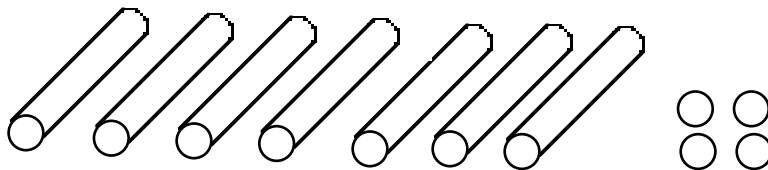
How would you unpack some of these candies so that you can sell 14 candies? How many candies will be left in the store room?

2. This many orange candies are in the candy shop.



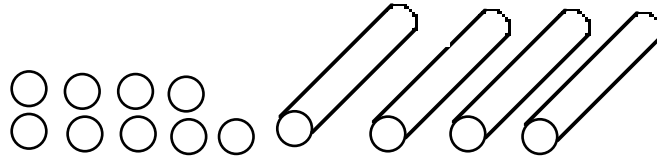
Ms. Wright makes 9 more candies. How many candies will be in the candy shop now?

3. This many grape candies were in the shop.



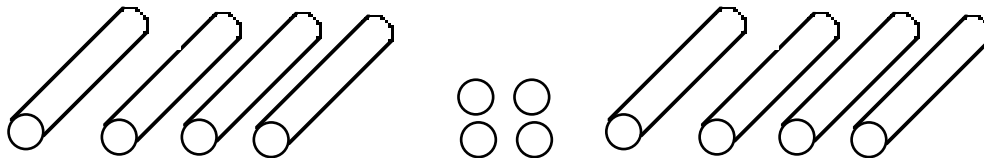
How would you unpack some of these so you can sell 65 candies? How many candies will be left in the store room?

1. This many peppermint candies are in the candy shop.



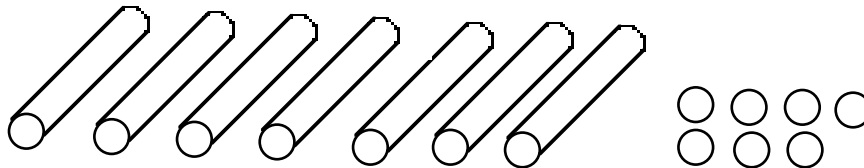
Ms. Wright makes 35 more candies. How many candies will be in the candy shop now?

2. This many cherry candies are in the candy shop.



How would you unpack some of these so you can sell 49 candies? How many candies will be left in the store room?

3. This many strawberry candies were in the shop.



How would you unpack some of these so you can sell 58 candies? How many candies will be left in the store room?

Candy Shop 12